


Name: _____

Use visual representations to find the area and the perimeter in each example.

EX. 1

5 m

2 m



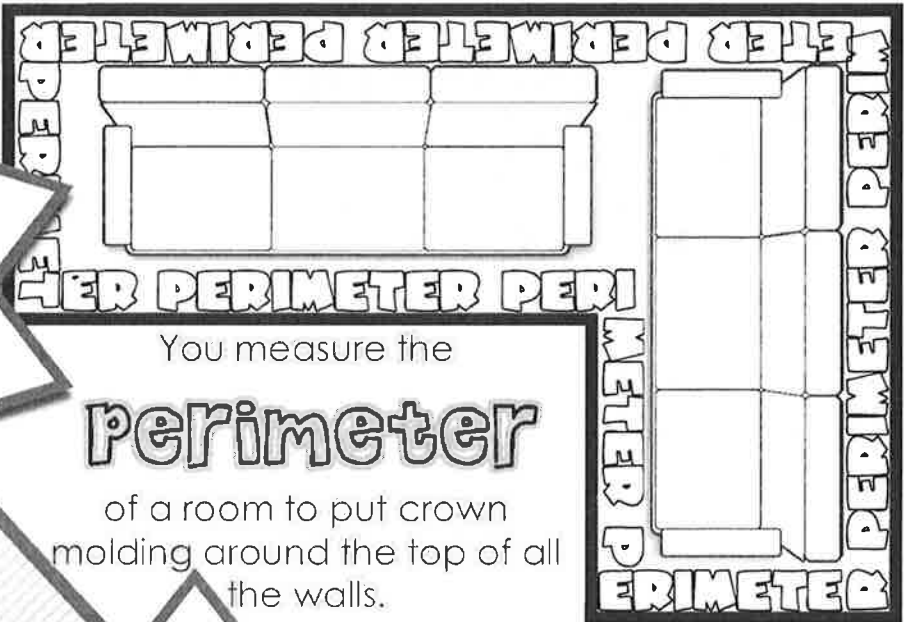
P =

A =

Area is measured in _____

units.

the space inside



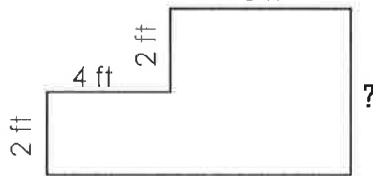
You measure the

Perimeter

of a room to put crown molding around the top of all the walls.

EX. 2

6 ft



P =

A =

the distance around

Perimeter is measured in _____

units.

area

You measure the _____ of a room to install tile on the entire floor.



EX. 3

3 cm



3 cm

P =

A =